



Valentine's Day



Word Problems

Valentine's Day Word Problems

Instructions


This file includes color pages (3-5) as well as a black and white option(6-8). Choose one and print for your student.

Answer Key:

Page 1: 5, 9, 9 5

Page 2: 5, 4, 2, 7

Page 3: 6, yes, 9, 7



Terms of Use

This product may be used for your own classroom or personal use. It may not be shared as a pdf file, on the web, or in any other way.
© RealLifeAtHome.com

Copyright Thanks:



Graphics designed by






Elliot made one valentine for his teacher, two valentines for friends, and two more for his cousins. How many total valentines did he make?


Kianna drew four pink hearts and five red hearts. How many total hearts did she draw?



Freddy counted three valentines in his box and then he found six more on his desk. How many total valentines does Freddy have?

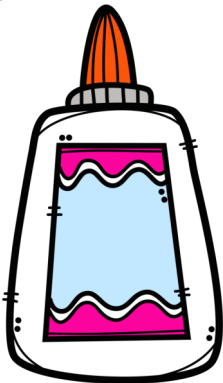

Franklin used three pieces of construction paper. Eve used two. How many total pieces of construction paper did Franklin and Eve use?





Paul needs ten hearts to make valentines. He has already cut out five. How many more hearts does Paul need?

Mary made four valentines. If Mary needs eight valentines to give to her friends, how many more does she need to make?



Mrs. Parker has seven bottles of glue. Nine students need glue to make valentines. How many students will have to wait for a bottle of glue?

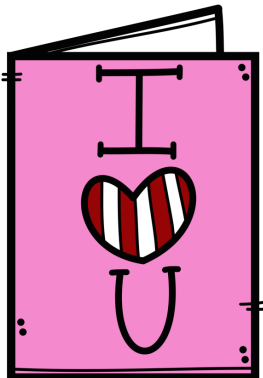

Lucy has ten classmates. She has delivered valentines to three classmates. How many more valentines does she need to deliver?



Lamar is putting two hearts on each valentine card. If he is making three cards, how many total hearts will he need?




Mrs. Parker has four students and each student wants two more pieces of construction paper. If Mrs. Parker has ten pieces of paper left, will she have enough for the students?



David received three valentines at school, two valentines from his neighbors, and four more from his cousins. How many total valentines did David receive?

Lizzie needs glue, scissors, glitter, and four pieces of construction paper to make valentines. How many total things does Lizzie need?






Elliot made one valentine for his teacher, two valentines for friends, and two more for his cousins. How many total valentines did he make?

Kianna drew four pink hearts and five red hearts. How many total hearts did she draw?



Freddy counted three valentines in his box and then he found six more on his desk. How many total valentines does Freddy have?


Franklin used three pieces of construction paper. Eve used two. How many total pieces of construction paper did Franklin and Eve use?





Paul needs ten hearts to make valentines. He has already cut out five. How many more hearts does Paul need?

Mary made four valentines. If Mary needs eight valentines to give to her friends, how many more does she need to make?




Mrs. Parker has seven bottles of glue. Nine students need glue to make valentines. How many students will have to wait for a bottle of glue?

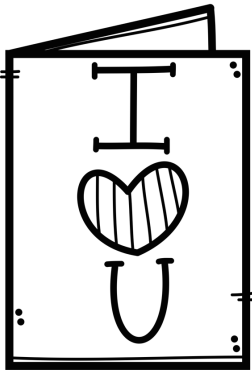

Lucy has ten classmates. She has delivered valentines to three classmates. How many more valentines does she need to deliver?



Lamar is putting two hearts on each valentine card. If he is making three cards, how many total hearts will he need?



Mrs. Parker has four students and each student wants two more pieces of construction paper. If Mrs. Parker has ten pieces of paper left, will she have enough for the students?



David received three valentines at school, two valentines from his neighbors, and four more from his cousins. How many total valentines did David receive?

Lizzie needs glue, scissors, glitter, and four pieces of construction paper to make valentines. How many total things does Lizzie need?

